



Name: _____

Class: _____

Map Work





Recording What We See

Draw a map of the route you take through the Great Masson Cavern.

Consider the symbols you will use to illustrate certain parts of the Cavern, for example steps.

A large rectangular area defined by a dotted line, intended for drawing a map of the route through the Great Masson Cavern.

KEY

	_____		_____
	_____		_____